

Name: _____

6th Grade

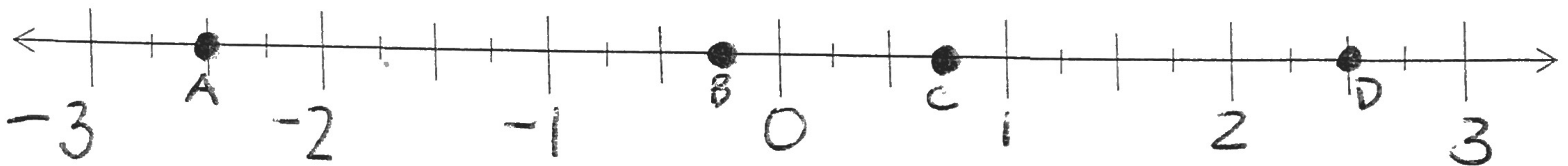
Spiral #12

due Wednesday!

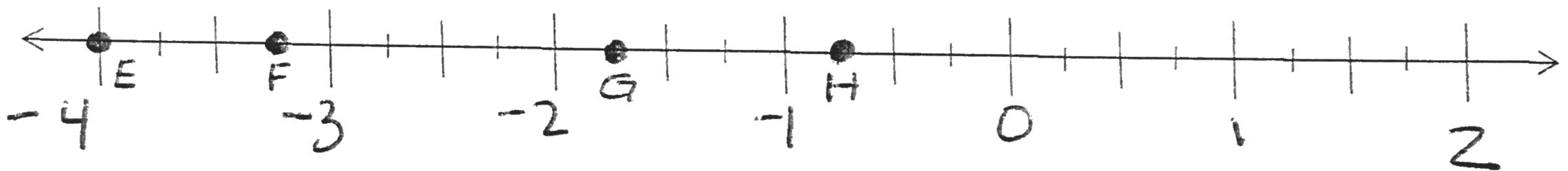
Which numbers are represented by the points on the number line?

A = _____ B = _____ C = _____ D = _____

①

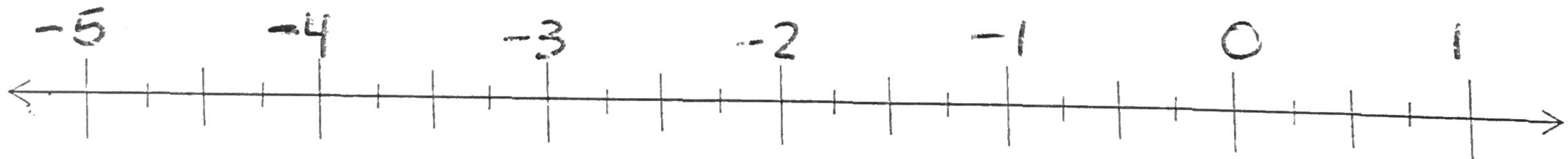


②

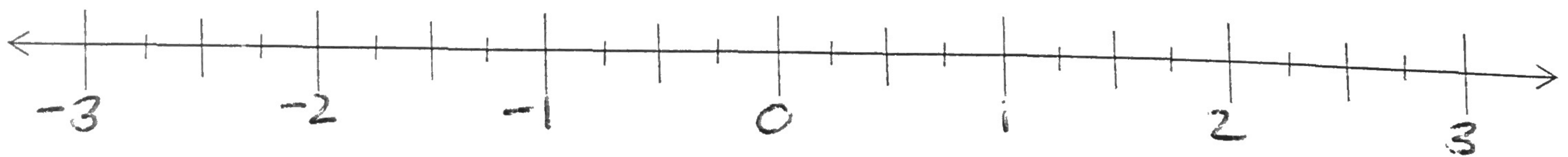


E = _____ F = _____ G = _____ H = _____

Plot DOTS on the number line and LABEL the dots (A, B, C...) in the correct places.



③ A = $-2\frac{1}{4}$ B = 0 C = $-4\frac{1}{2}$ D = $\frac{3}{4}$



④ E = $2\frac{3}{4}$ F = $-1\frac{3}{4}$ G = $-\frac{3}{4}$ H = $1\frac{1}{4}$

① Jessie owes her mom \$3. She earns \$8 mowing her neighbor's lawn. How much does Jessie have after paying her mom back?

② Bobby spent more money than he had in his bank account and now has a balance of $-\$13$. Bobby puts \$5 into his account. What is Bobby's bank balance now?

③ Sylvia's bank balance was \$18. She spent \$25! What is Sylvia's bank balance now?

④ Silas's bank balance was $-\$3$. He put \$10 into his account and then spent \$8. What is Silas's balance now?